



Have a go

Watch others

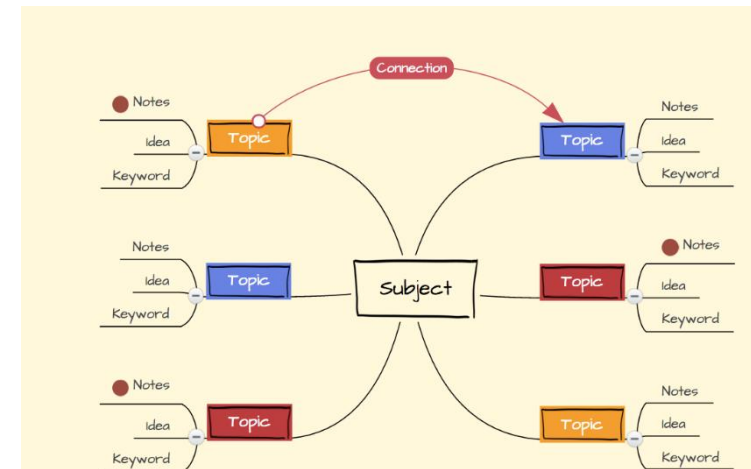


If you wanted to get better at free kicks, which activity would you do? Why?

Diagrams



Mind map strategies



# Exam Papers: Practice makes Perfect

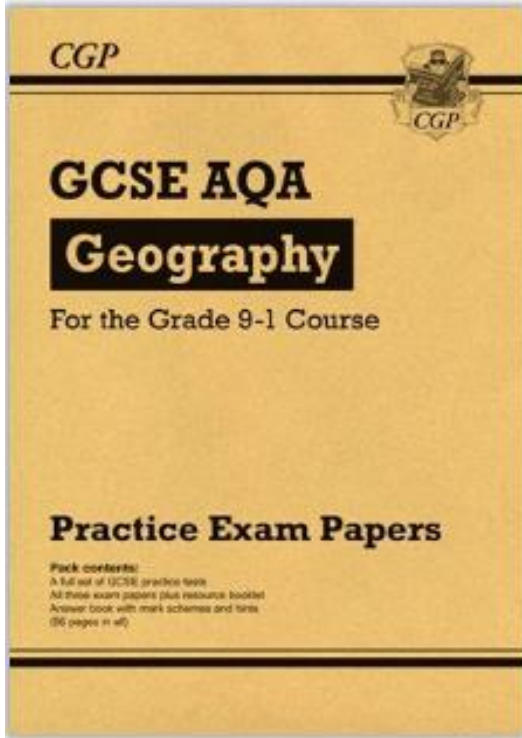
Highly effective  
strategy

High effort

Little and often

- ✓ One of the only activities which reveals what you don't know
- ✓ Comfortable and confident with the exam
- ✓ Practise timing
- ✓ Makes the learning stick because you have to apply your learning

# Where can you find papers?



CGP sell bundles of practice papers for most subjects £5.00

Red revision pack provided by the English department

Science – AQA website

Maths – folder on shared network

Ask teachers!

*'All teenagers should have a part time job alongside their education.'* Write an article in which you express your viewpoint on this statement.

Planning!

If you develop the ability to plan well, you are half way there!



### Benefits

Idea generating – bank ideas

Speed at planning

Pushing to think of more mature arguments through discussion

Strategies

*'All teenagers should have a part time job alongside their education.'* Write an article in which you express your viewpoint on this statement.

Little and often  
~~'write an essay'~~

- ✓ Write the headline and opening
- ✓ Write a counterargument paragraph
- ✓ Write a powerful ending
- ✓ 10 minutes of writing focusing on using a colon and a dash.



# Science

**Practising an exam paper  
can sometimes be about  
practising strategy**

**Key word** the questions!

Context or concept?

Where *might* you have lost a  
mark through a careless error?

**Q1.**

White blood cells protect the body against pathogens such as bacteria and viruses.

- (a) (i) Pathogens make us feel ill.

Give **one** reason why.

---

---

(1)

- (ii) White blood cells produce antibodies. This is one way white blood cells protect us against pathogens.

Give **two** other ways that white blood cells protect us against pathogens.

1.

---

2.

---

---

(2)

# Boundaries - English language

## The importance of every mark...

	9	8	7	6	5	4	3	2	1
LANG P1 /80	66	61	56	51	45	40	30	20	10
LANG P2 /80	67	62	58	52	47	42	30	20	10
OVERALL	133	123	114	103	92	82	60	40	20



# Geography...

Refine your map reading skills!

## Section C Physical landscapes in the UK

Answer two questions from the following:

Question 3, Question 4, Question 5

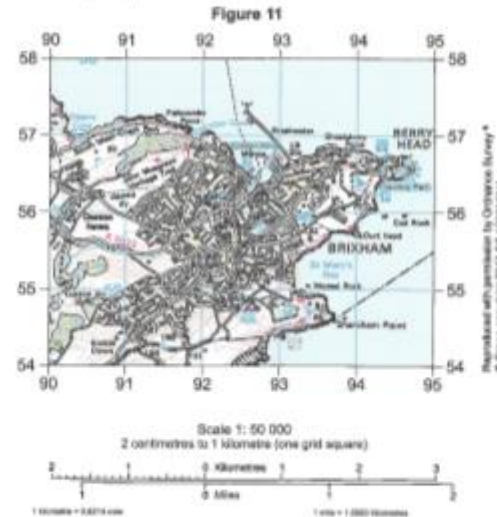
Shade the ovals below to show which two questions you will answer.

Question 3 (Coasts) ☐ Question 4 (Rivers) ☐ Question 5 (Glacial) ☐

CORRECT METHOD ☒ WRONG METHOD ☐ ☐ ☐ ☐

### Question 3 Coastal landscapes in the UK

Study Figure 11, part of the coastline of south west England shown on a 1:50 000 Ordnance Survey® map.



- 3.1 Give the four figure grid reference for the grid square in Figure 11 that features Elberry Cove.

[1 mark]

Leave blank

- 3.2 What is the difference in height between the spot height at 914542 and the spot height on the golf course at 908588?

Shade one oval only.

- A 8 metres ☐  
B 46 metres ☐  
C 71 metres ☐  
D 91 metres ☐

[1 mark]

Study Figure 12, a photograph taken at 931549 in Figure 11, with the photographer facing northeast.

Figure 12



- 3.3 Using Figures 11 and 12, name the headland shown in the photograph.

[1 mark]

- 3.4 Suggest one reason why the headland and bay shown in Figure 12 have formed on this stretch of coastline.

[1 mark]



If you add a little to a little and do this often, soon the little will become great.

Monday	Tuesday	Wednesday	Thursday	Friday	Saturday	Sunday
English language paper 1 Q4 (25 mins)  Science concept revision (15 mins)	Memrise (15 mins)  First 5 questions on maths paper (10 mins)	Macbeth (plan & write intro (15 mins)  History (15 minutes)	DAY OFF!	Geography quizziz (10 mins)  Maths (20 minutes)	Geography – map reading (15 mins)	English Language paper 1 Q2 (15 mins)